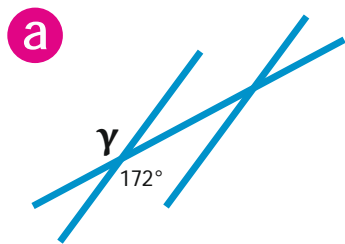


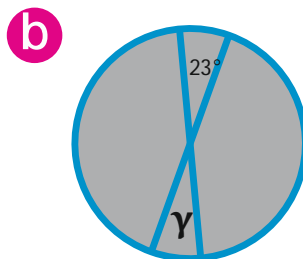
Zadania

1. Kąty wierzchołkowe

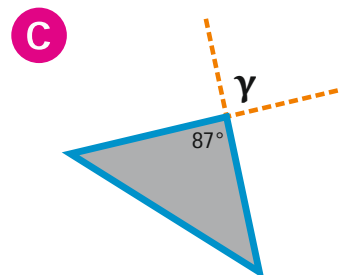
a) Oblicz miarę kąta γ .



$$\gamma = \boxed{}$$

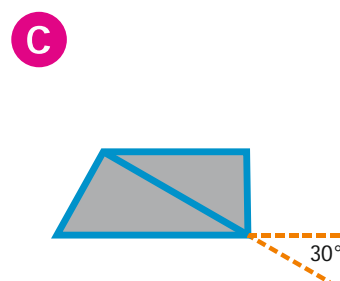
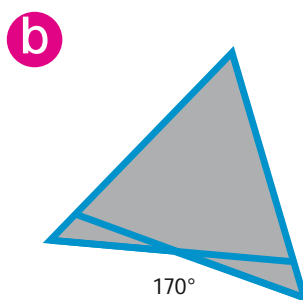



$$\gamma = \boxed{}$$



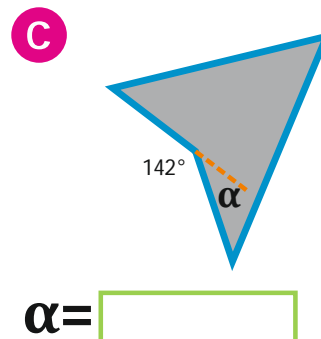
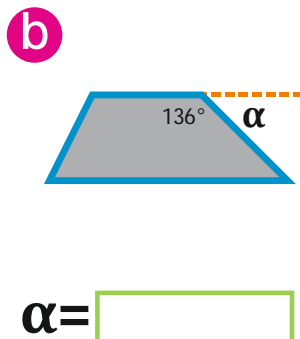
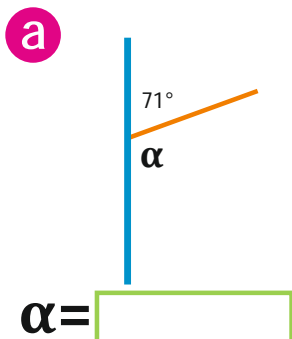
$$\gamma = \boxed{}$$

b) Zaznacz łukiem kąt równy danemu kątowi



2. Kąty przyległe

a) Oblicz miarę kąta α .



b) Zaznacz łukiem kąt przyległy do danego kąta.
Oblicz jego miarę.

